



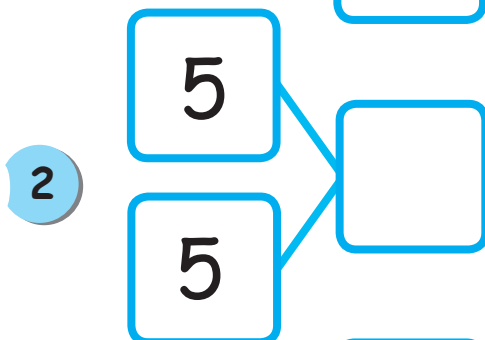
# Forming Number Bonds




Write the correct numbers on the lines and in the boxes.



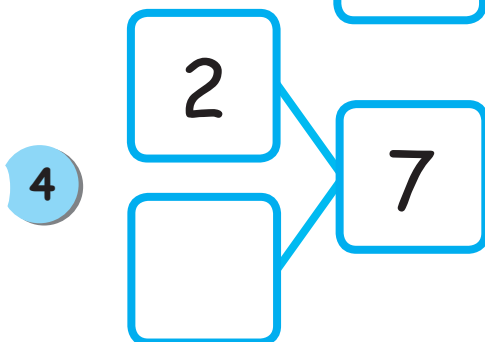
$$\underline{\quad} + \underline{\quad} = 5$$



$$5 + \underline{\quad} = \underline{\quad}$$



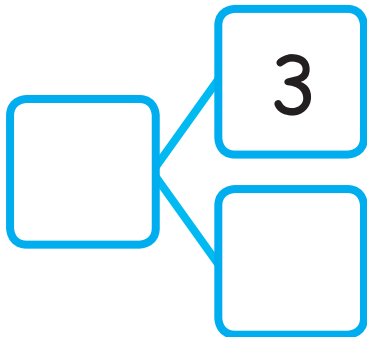
$$\underline{\quad} + \underline{\quad} = 9$$



$$\underline{\quad} + 5 = \underline{\quad}$$

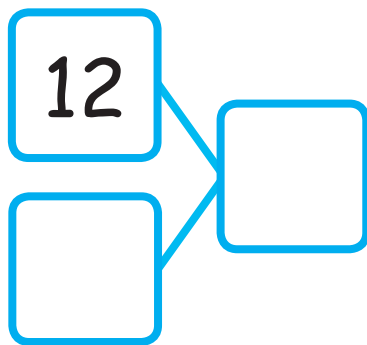
Write the correct numbers on the lines and in the boxes.

5



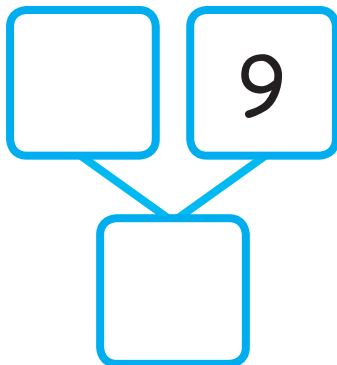
$$\underline{\hspace{2cm}} + 3 = 19$$

6



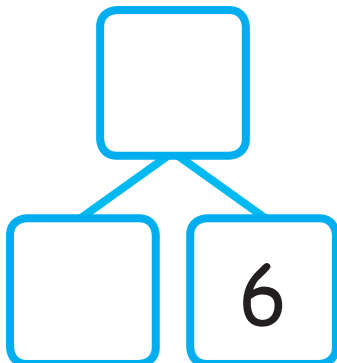
$$12 + \underline{\hspace{2cm}} = 15$$

7



$$9 + \underline{\hspace{2cm}} = 18$$

8



$$\underline{\hspace{2cm}} + 6 = 16$$